

EECS 360 Short Quiz #1
Signal and System Analysis
 September 11, 2014

Name: KEY

Open book, open notes, no calculator. Be neat, write legibly. For full credit you must show all work and justify each answer. You may write on the both sides of the paper, and use additional sheets of paper if needed.

1. (25 %) Find the even part, $x_e(t)$, and the odd part, $x_o(t)$, of the following signals:

(a) $x(t) = u(t)$.

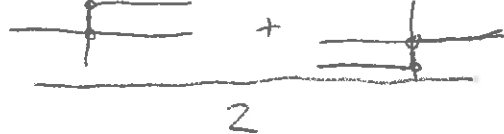
(b) $x(t) = 4t - 1$.

(c) $x(t) = e^{-j8\pi t} + e^{j11\pi t}$.

$$x_e(t) = \frac{x(t) + x(-t)}{2} \quad x_o(t) = \frac{x(t) - x(-t)}{2}$$

(a) $x_e(t) = \frac{u(t) + u(-t)}{2} =$ 

$$= \frac{1}{2} \leftarrow \text{for all } t$$

$x_o(t) = \frac{u(-t) - u(-t)}{2} =$ 

$$= \frac{1}{2} \text{sgn}(t)$$

(b) $x_e(t) = \frac{4t - 1 + (4(-t) - 1)}{2} = \frac{4t - 1 - 4t - 1}{2} = -1$

$x_o(t) = \frac{4t - 1 - (4(-t) - 1)}{2} = \frac{4t - 1 + 4t + 1}{2} = 4t$

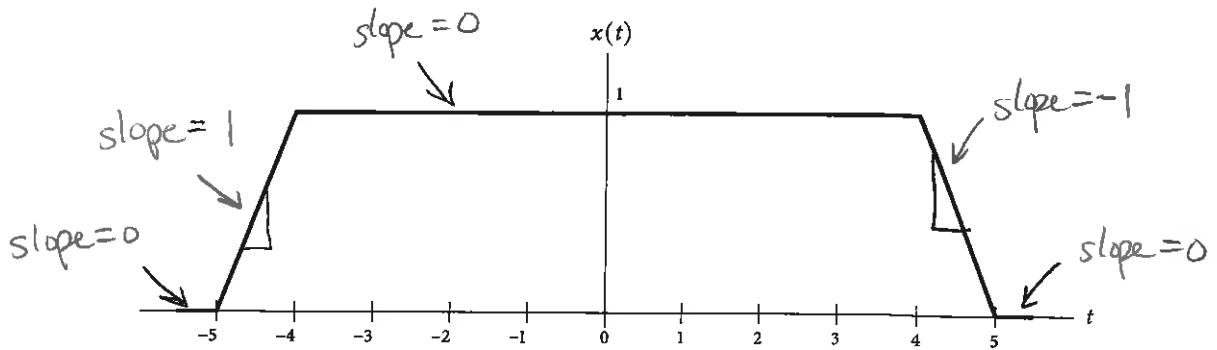
(c) If we are really clever, we would recall that $\sin(t)$ is odd and $\cos(t)$ is even, and we would break these into even/odd with Euler's identity. But if we are not clever...

$$x_e(t) = \frac{(e^{-j8\pi t} + e^{j11\pi t}) + (e^{j8\pi t} + e^{-j11\pi t})}{2} = \frac{(e^{j8\pi t} + e^{-j8\pi t})}{2} + \frac{(e^{j11\pi t} + e^{-j11\pi t})}{2} = \cos(8\pi t) + \cos(11\pi t)$$

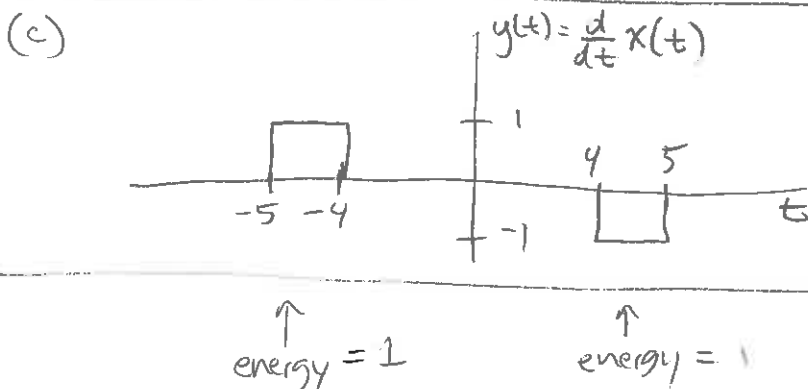
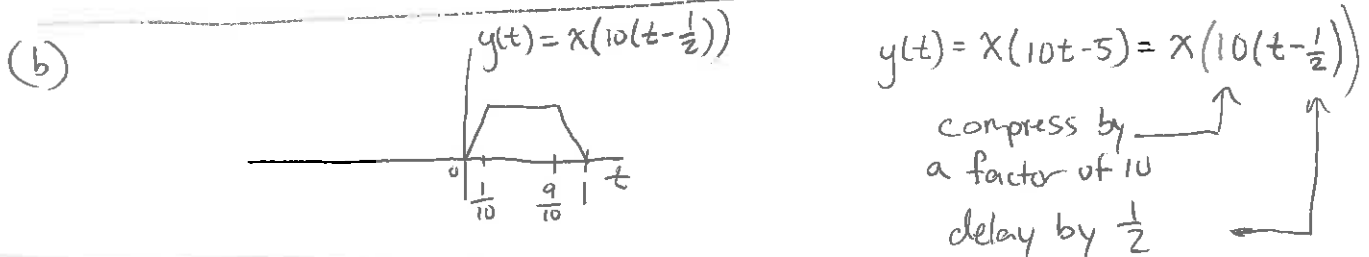
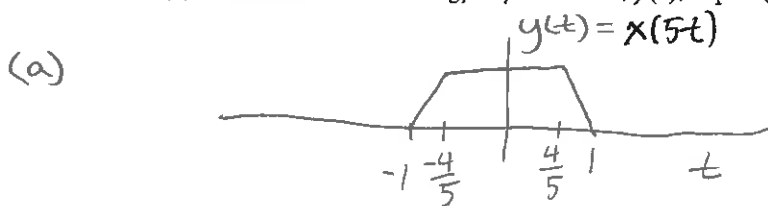
$$x_o(t) = \frac{(e^{-j8\pi t} + e^{j11\pi t}) - (e^{j8\pi t} + e^{-j11\pi t})}{2} = \frac{-j(e^{-j8\pi t} - e^{j8\pi t})}{2j} + \frac{j(e^{j11\pi t} - e^{-j11\pi t})}{2} = -j\sin(8\pi t) + j\sin(11\pi t)$$

... then we get to see Euler's identity in action

2. (35 %) Consider the trapezoidal-shaped pulse $x(t)$ below.



- Sketch the output $y(t)$ of the system $y(t) = x(5t)$.
- Sketch the output $y(t)$ of the system $y(t) = x(10t - 5)$.
- Sketch the output $y(t)$ of the system $y(t) = \frac{d}{dt}x(t)$.
- Determine the total energy of your answer, $y(t)$, in part (c).



$$\int_{-\infty}^{\infty} \left(\frac{d}{dt}x(t) \right)^2 dt = 1 + 1 = \boxed{2}$$

3. (40 %) The systems below have excitation $x(t)$ or $x[n]$ and response $y(t)$ or $y[n]$. For each system, determine whether it is (i) linear, (ii) time invariant, (iii) causal, and (iv) stable.

(a) $y[n] = |x[n]|$

(b) $y(t) = x(t-3) + 2 \int_{-\infty}^{0.5t} x(\tau) d\tau$

(a) Linear? **No** $x_1[n] = g[n] \rightarrow y_1[n] = |g[n]|$ and $K y_1[n] = K |g[n]|$
 $x_2[n] = K g[n] \rightarrow y_2[n] = |K g[n]|$
 these two are not the same.

Time Invariant **Yes** $x_1[n] = g[n] \rightarrow y_1[n] = |x_1[n]| = g[n]$ $\xrightarrow{\text{delay } n_0}$ $y_1[n-n_0] = |g[n-n_0]|$
 $x_2[n] = g[n-n_0] \rightarrow y_2[n] = |g[n-n_0]|$
 these two are the same

Causal **Yes** $y[n]$ depends only on $x[n]$ (the current input) and no future inputs, which makes it causal. It is in fact memoryless

Stable **Yes** If $x[n]$ is bounded by $\pm B$, then $y[n]$ is bounded by 0 and B

(b) Linear **Yes** Let the input be $\alpha x_1(t) + \beta x_2(t) \rightarrow (\alpha x_1(t-3) + \beta x_2(t-3)) + 2 \int_{-\infty}^{0.5t} (\alpha x_1(\tau) + \beta x_2(\tau)) d\tau$
 $= \alpha \left(x_1(t-3) + 2 \int_{-\infty}^{0.5t} x_1(\tau) d\tau \right) + \beta \left(x_2(t-3) + 2 \int_{-\infty}^{0.5t} x_2(\tau) d\tau \right)$
 $\alpha y_1(t) + \beta y_2(t)$

Time invariant **No** $x_1(t) = g(t) \rightarrow y_1(t) = x_1(t-3) + 2 \int_{-\infty}^{0.5t} x_1(\tau) d\tau$
 $= g(t-3) + 2 \int_{-\infty}^{0.5t} g(\tau) d\tau$ $\xrightarrow{\text{delay } t_0}$ $y_1(t-t_0) = g(t-t_0-3) + 2 \int_{-\infty}^{0.5t-0.5t_0} g(\tau) d\tau$

$x_2(t) = g(t-t_0) \rightarrow y_2(t) = x_2(t-3) + 2 \int_{-\infty}^{0.5t} x_2(\tau) d\tau$
 $= g(t-3-t_0) + 2 \int_{-\infty}^{0.5t} g(\tau-t_0) d\tau$
 change of variables $\tau = \lambda + t_0 \Rightarrow d\tau = d\lambda$
 $= g(t-t_0-3) + 2 \int_{-\infty}^{0.5t-t_0} g(\lambda) d\lambda$
 not the same

Causal? No

In order
to compute

$y(-100)$

we need

$x(t)$ from $-\infty \leq t \leq -50$

relative to $y(-100)$, $x(-50)$ is
in the future!

Stable? No

Let $x(t) = u(t)$ which is a bounded input

because of the limits of integration we will have

$$y(t) = u(t-3) + 2 \cdot \text{ramp}(0.5t)$$

$$= u(t-3) + \text{ramp}(t)$$

and this is unbounded!